







ANSWERS



Half-Hour Match Up



View the time on the clocks. Draw a line from the time to the correct time on the clock.



11:30

2:30

4:30

7:30

12:30

3:30

9:30

5:30

1:30

8:30

10:30

6:30

