



Name: _____

Date: _____

Answers**Count and Add Blocks***Directions: Count the blocks, and then write how many there are.*Example:



$$\begin{array}{r}
 23 \\
 + 4 \\
 \hline
 27 \text{ in all}
 \end{array}$$

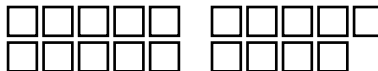

Tip: Write the number
10 above each group
of 10 blocks.



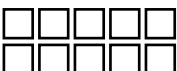

$$\begin{array}{r}
 13 \\
 + 5 \\
 \hline
 18
 \end{array}$$



$$\begin{array}{r}
 19 \\
 + 3 \\
 \hline
 22
 \end{array}$$



$$\begin{array}{r}
 15 \\
 + 8 \\
 \hline
 23
 \end{array}$$

$$\begin{array}{r}
 21 \\
 + 4 \\
 \hline
 25
 \end{array}$$

$$\begin{array}{r}
 12 \\
 + 6 \\
 \hline
 18
 \end{array}$$

$$\begin{array}{r}
 17 \\
 + 2 \\
 \hline
 19
 \end{array}$$

